


Name: Michelle Lopez

Date: 8-15-18

EXIT TICKET

Self-assessment	I mastered the learning objective today.	I am almost there.	Need more practice and feedback.
Teacher feedback	You mastered the learning objective today.	You are almost there.	You need more practice and feedback.

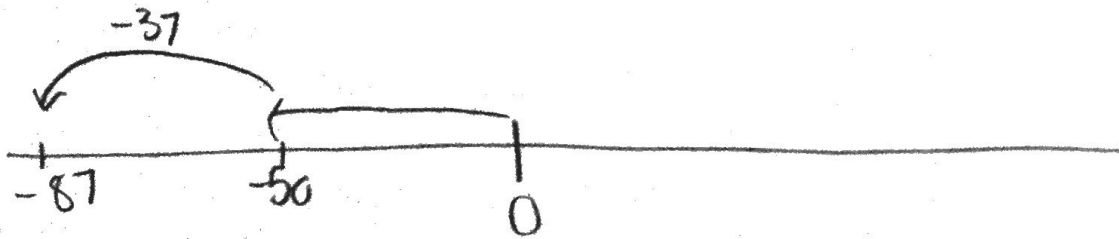
1. Use a number line to model and evaluate the expression $-47 + -56$. Explain how you used the number line to evaluate the expression.



I first started on the first negative number which is -47 , and I started from zero, drew a arrow to -47 . Then it's telling me to add -56 more which means go more to the left side of the number line. On top of that second arrow, I wrote -56 . After that I added both of them because you are going further out, then my final answer was -103 .

2. Alonso overdrew his bank account and his account balance showed $-\$50$. He spent an additional $\$37$ going out to the movies with friends. Write an expression and draw a line number to determine Alfonso's current bank account balance.

$-50 + (-37)$



$$\begin{array}{r} 37 \\ + 50 \\ \hline 87 \end{array}$$

Name: Karla Morales

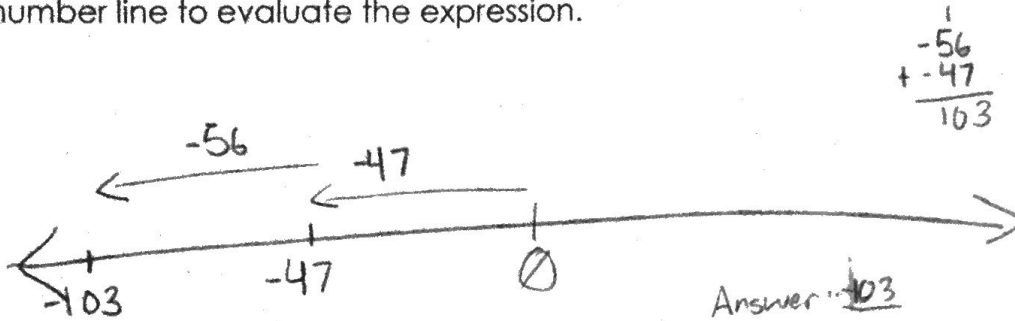


Date: 8/15/18

EXIT TICKET

Self-assessment	I mastered the learning objective today. *	I am almost there.	Need more practice and feedback.
Teacher feedback	You mastered the learning objective today.	You are almost there.	You need more practice and feedback.

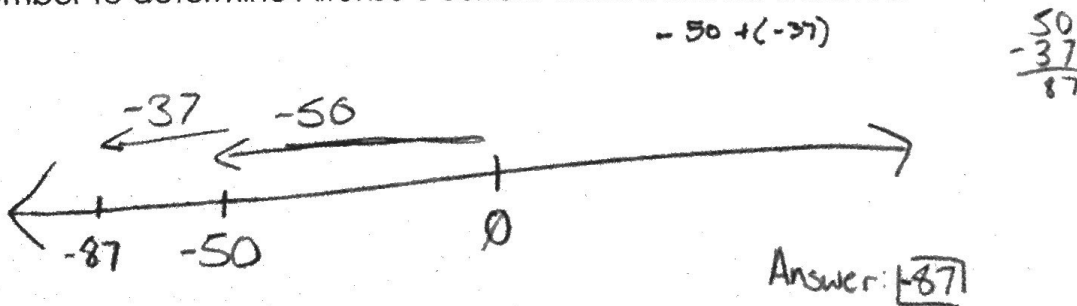
1. Use a number line to model and evaluate the expression $-47 + -56$. Explain how you used the number line to evaluate the expression.



Great!

I used the number line and started at zero and went back 47. The reason I did that was because -47 is a negative, so it goes to the left side. Then, it adds -56, so I go the the left by 56, and it gives me -103.

2. Alonso overdraw his bank account and his account balance showed $-\$50$. He spent an additional $\$37$ going out to the movies with friends. Write an expression and draw a line number to determine Alfonso's current bank account balance.




Name: Cynthia Grajeda

Date: 8/15/18

EXIT TICKET

Self-assessment	I mastered the learning objective today. ✓	I am almost there.	Need more practice and feedback.
Teacher feedback	You mastered the learning objective today.	You are almost there.	You need more practice and feedback.


1. Use a number line to model and evaluate the expression $-47 + -56$. Explain how you used the number line to evaluate the expression.



could improve explain each step & reasoning

I used the number line to show that I started off with -47 and added -56 to find my answer which is where I landed on the number line.

2. Alonso overdraw his bank account and his account balance showed $-\$50$. He spent an additional $\$37$ going out to the movies with friends. Write an expression and draw a line number to determine Alfonso's current bank account balance.




Name: Kamillah Cervantes

Date: 8/15/18

EXIT TICKET

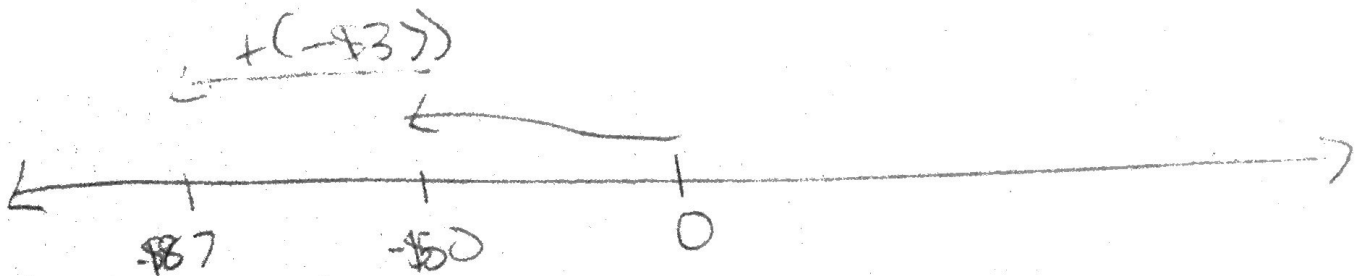
Self-assessment	I mastered the learning objective today.	I am almost there.	Need more practice and feedback.
Teacher feedback	You mastered the learning objective today.	You are almost there.	You need more practice and feedback.

1. Use a number line to model and evaluate the expression $-47 + -56$. Explain how you used the number line to evaluate the expression.



I used the number line to evaluate the expression $-47 + -56$. I did this by first drawing the 0. Then I made an arrow pointing to the number -47. I then added -56 which I made an arrow pointing to -103.

2. Alonso overdrew his bank account and his account balance showed $-\$50$. He spent an additional $\$37$ going out to the movies with friends. Write an expression and draw a line number to determine Alfonso's current bank account balance.



$$-\$50 + -\$37$$


Name: Alan H.

Date: 8/15/18

EXIT TICKET

Self-assessment	I mastered the learning objective today.	I am almost there.	Need more practice and feedback.
Teacher feedback	You mastered the learning objective today.	You are almost there.	You need more practice and feedback.

1. Use a number line to model and evaluate the expression $-47 + -56$. Explain how you used the number line to evaluate the expression.

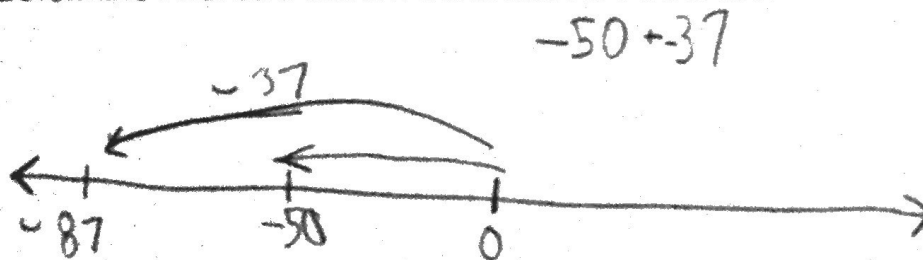


$$\begin{array}{r} +1 \\ -56 \\ +47 \\ \hline -103 \end{array}$$



I used the number line by starting from 0 then, going to -47. After that, I added -56 to -47 and got -103.

2. Alonso overdraw his bank account and his account balance showed $-\$50$. He spent an additional $\$37$ going out to the movies with friends. Write an expression and draw a line number to determine Alfonso's current bank account balance.



$$-50 + -37$$

-87


Name: Virginia Perez

Date: _____

EXIT TICKET

Self-assessment	I mastered the learning objective today.	I am almost there.	Need more practice and feedback.
Teacher feedback	<u>You mastered the learning objective today.</u>	You are almost there.	You need more practice and feedback.

1. Use a number line to model and evaluate the expression $-47 + -56$. Explain how you used the number line to evaluate the expression.



explain the steps you took


The way that this was helpful was that it kept track of what number and that it will determine the number space.

that needs work

2. Alfonso overdrew his bank account and his account balance showed $-\$50$. He spent an additional $\$37$ going out to the movies with friends. Write an expression and draw a line number to determine Alfonso's current bank account balance.

$$-50 + -37 =$$

$-\$87$




Name: Xavier Ocasio

Date: _____

EXIT TICKET

Self-assessment	I mastered the learning objective today.	I am almost there.	Need more practice and feedback.
Teacher feedback	You <u>mastered</u> the learning objective today.	You are almost there.	You need more practice and feedback.

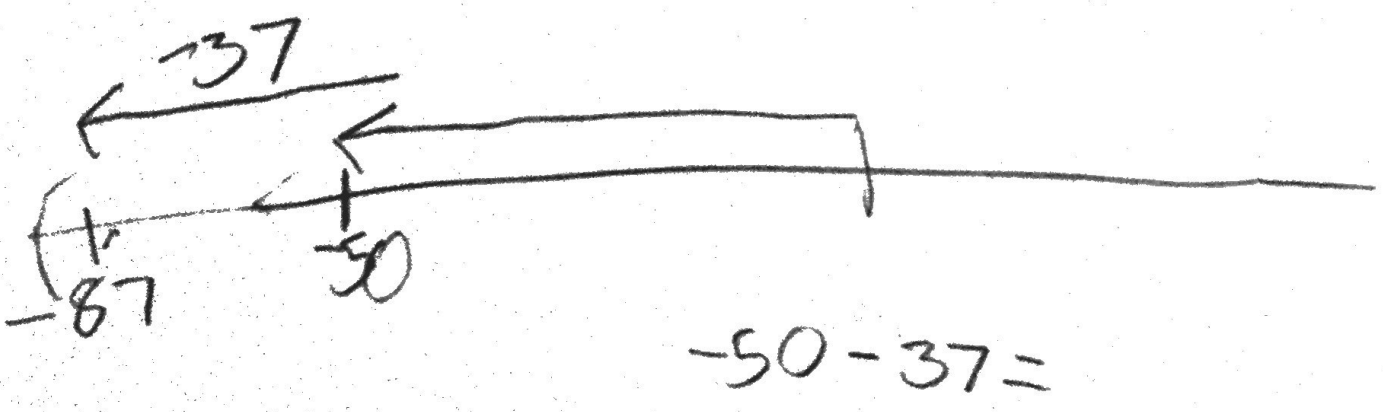
1. Use a number line to model and evaluate the expression $-47 + -56$. Explain how you used the number line to evaluate the expression.



If you add 47 and 56 you get 103
so I add $-47 + (-56)$ and got -103 .

good!
please
show
draw the
number
line to
each step

2. Alfonso overdraw his bank account and his account balance showed $-\$50$. He spent an additional $\$37$ going out to the movies with friends. Write an expression and draw a number line to determine Alfonso's current bank account balance.




Name: Emma Mena

Date: August 14, 2018

EXIT TICKET

Self-assessment	I mastered the learning objective today.	I am almost there.	Need more practice and feedback.
Teacher feedback	You mastered the learning objective today.	You are almost there.	You need more practice and feedback.

1. Use a number line to model and evaluate the expression $-47 + -56$. Explain how you used the number line to evaluate the expression.



$$\begin{array}{r} +1 \\ 47 \\ +56 \\ \hline 103 \end{array}$$



$$\begin{array}{r} 47 \\ 56 \\ \hline 103 \\ -47 \\ \hline 56 \\ -47 \\ \hline 9 \end{array}$$

great! I used the number line by first writing a 0 then making an arrow all the way to -47. Then, I ~~add~~ added 56 - 47 which was 9. After, I drew an arrow all the way to 9.
explain motives or why you did those things

2. Alonso overdraw his bank account and his account balance showed -\$50. He spent an additional \$37 going out to the movies with friends. Write an expression and draw a line number to determine Alfonso's current bank account balance.

