

Name: Karla Morales

Date: 8/28/18

EXIT TICKET

Self-assessment	I mastered the learning objective today.	I am almost there.	Need more practice and feedback.
Teacher feedback	You mastered the learning objective today.	You are almost there.	You need more practice and feedback.

1) Draw a number line to represent and evaluate the expression

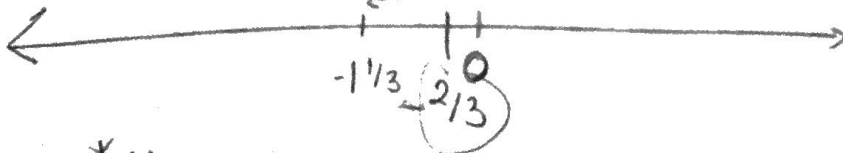


$$\left(-\frac{4}{3}\right) - \left(-\frac{3}{4}\right)$$

$$-\frac{4}{3} + \frac{3}{4}$$

$$-\frac{3}{4}$$

$$-\frac{1}{3}$$



$$\begin{array}{r} 1 \frac{1}{3} \\ - \quad \frac{3}{4} \\ \hline \end{array}$$

$$* \frac{16}{12}$$

$$\frac{9}{12}$$

$$\frac{8}{12} = \frac{4}{6} = \frac{2}{3}$$

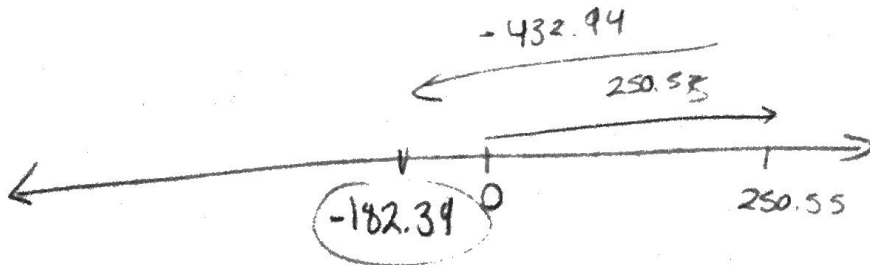
started

8/12

2) Dominique had a balance of 250.55 in her bank account in December. In January, she withdrew 432.94 over the course of the month. Write an expression to represent the situation and use a number line to determine Dominique's account balance at the end of January.

take away

$$\$250.55 + (-\$432.94)$$



$$\begin{array}{r} 3432.94 \\ 250.55 \\ \hline -182.39 \end{array}$$


Name: Virginia

Date: \_\_\_\_\_

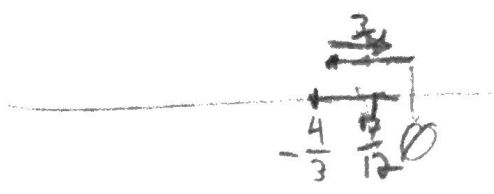
**EXIT TICKET**

Self-assessment	I mastered the learning objective today.	I am almost there.	Need more practice and feedback.
Teacher feedback	You mastered the learning objective today.	You are almost there.	You need more practice and feedback.

1) Draw a number line to represent and evaluate the expression



$$\left(-\frac{4}{3}\right) + \left(-\frac{3}{4}\right) = -\frac{7}{12}$$



2) Dominique had a balance of 250.55 in her bank account in December. In January, she withdrew 432.94 over the course of the month. Write an expression to represent the situation and use a number line to determine Dominique's account balance at the end of January.

$$250.55 - 432.94 = -182.39$$

$$\begin{array}{r} 313 \\ 432.94 \\ 250.55 \\ \hline 182.39 \end{array}$$

