

NAME _____

DATE _____

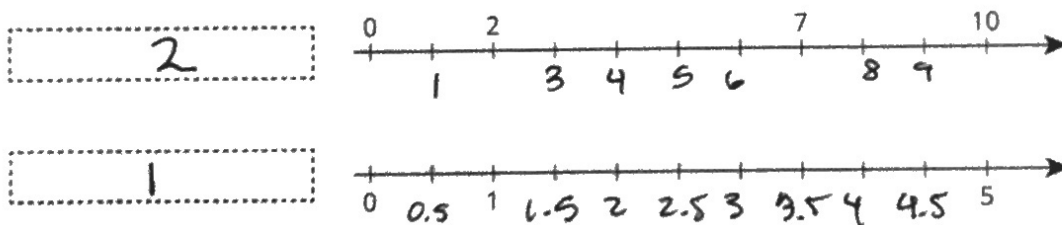
PERIOD _____

Unit 2, Lesson 1: One of These Things Is Not Like the Others

Let's remember what equivalent ratios are.

1.1: Remembering Double Number Lines

1. Complete the double number line diagram with the missing numbers.



2. What could each of the number lines represent? Invent a situation and label the diagram.

For every 1 cup of rice, I need to boil it with 2 cups of water.

3. Make sure your labels include appropriate units of measure.

1.2: Mystery Mixtures

Your teacher will show you three mixtures. Two taste the same, and one is different.

1. ~~Which mixture tastes different? Describe how it is different.~~

(see back for measurements)

First mixture is diff.

- It is stronger

b/c it has more

drinking it

NAME

DATE

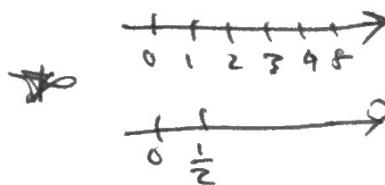
PERIOD

2. Here are the recipes that were used to make the three mixtures:

- ★ 1 cup of water with $1\frac{1}{2}$ teaspoons of powdered drink mix ☑ water mix ☑☑
- + ○ 2 cups of water with $\frac{1}{2}$ teaspoon of powdered drink mix ☑☑ " " ☑
- 1 cup of water with $\frac{1}{4}$ teaspoon of powdered drink mix ☑ " " ☑☑☑

Which of these recipes is for the stronger tasting mixture? Explain how you know.

1st has more drink mix
per every cup



Are you ready for more?

Will any of these mixtures taste exactly the same?

H ₂ O	Mix
2	$1\frac{1}{2}$
1	$\frac{1}{4}$

H ₂ O	Mix
1	$1\frac{1}{2}$
2	3

- Mixture A: 2 cups water, 4 teaspoons salt, 0.25 cup sugar
- Mixture B: 1.5 cups water, 3 teaspoons salt, 0.2 cup sugar
- Mixture C: 1 cup water, 2 teaspoons salt, 0.125 cup sugar

Same
equally salty
but sweeter

NAME _____

DATE _____

PERIOD _____

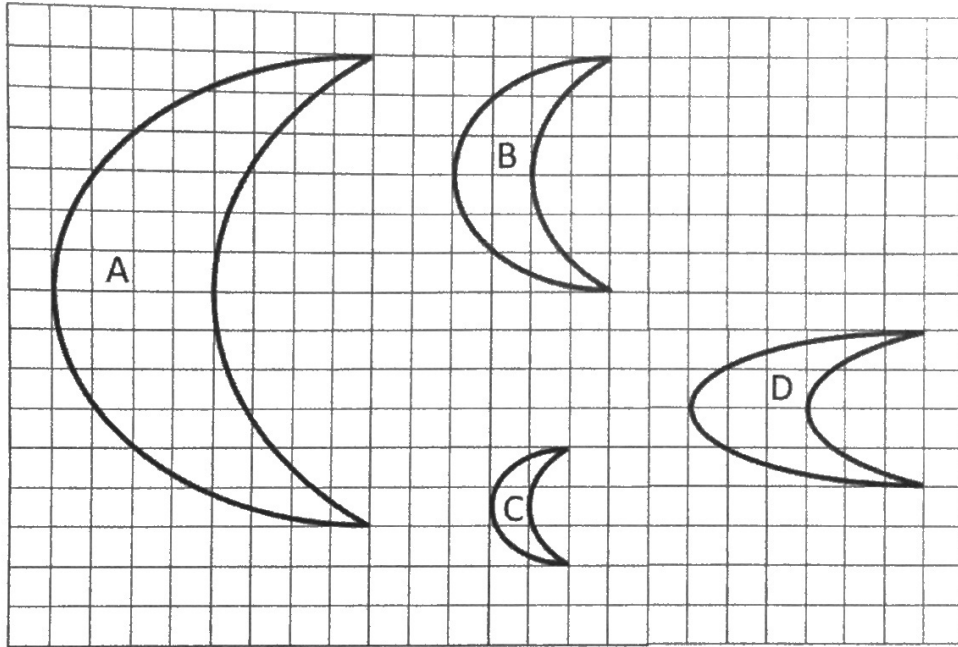
1.3: Crescent Moons

3 mins quiet think

pause after 1-2

m.openup.org/1/7 2-1-3

Here are four different crescent moon shapes.



Talk w/ partner
How is moon D diff?

1. What do moons A, B, and C all have in common that moon D doesn't?

D is smashed down. A, B, C are taller, D is wider

2. Use numbers to describe how moons A, B, and C are different from moon D.

Enclose moon

w/ rectangle to compare width/height

3. Use a table or a double number line to show how moons A, B, and C are different from moon D.

Moon	L	W	$L \div W$
A	8	12	$8/12 = 2/3$
B	4	6	$4/6 = 2/3$
C	2	3	$2/3$
D	6	4	$6/4 = 3/2$

If you can cover 1 moon

w/ another, must have equivalent ratios

NAME _____

DATE _____

PERIOD _____

Lesson 1 Summary

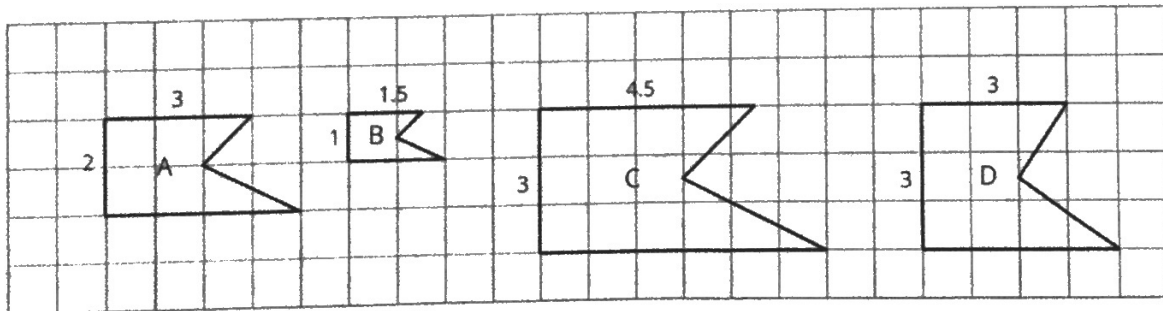
When two different situations can be described by **equivalent ratios**, that means they are alike in some important way.

An example is a recipe. If two people make something to eat or drink, the taste will only be the same as long as the ratios of the ingredients are equivalent. For example, all of the mixtures of water and drink mix in this table taste the same, because the ratios of cups of water to scoops of drink mix are all equivalent ratios.

water (cups)	drink mix (scoops)
3	1
12	4
1.5	0.5

If a mixture were not equivalent to these, for example, if the ratio of cups of water to scoops of drink mix were 6 : 4, then the mixture would taste different.

Notice that the ratios of pairs of corresponding side lengths are equivalent in figures A, B, and C. For example, the ratios of the length of the top side to the length of the left side for figures A, B, and C are equivalent ratios. Figures A, B, and C are *scaled copies* of each other; this is the important way in which they are alike.



If a figure has corresponding sides that are not in a ratio equivalent to these, like figure D, then it's not a scaled copy. In this unit, you will study relationships like these that can be described by a set of equivalent ratios.

Lesson 1 Glossary Terms

- equivalent ratios

Two ratios $a:b$ and $c:d$ are equivalent if there is a number, s ,